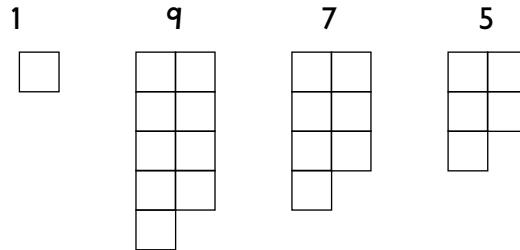
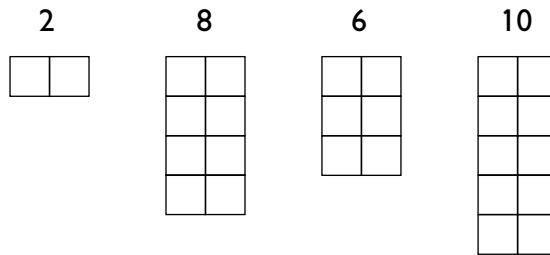


Odd and even puzzle

1. These are all odd numbers.

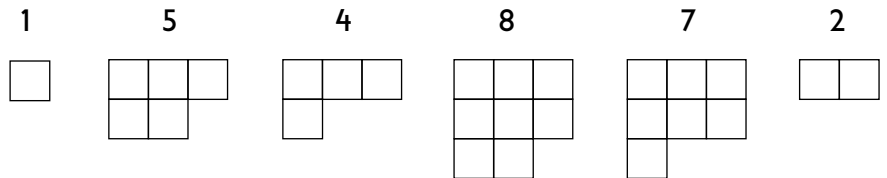


And these are all even.

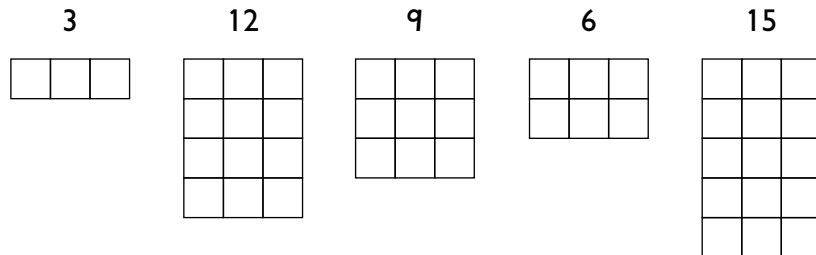


How many odd numbers are there below 100? And how many even?

2. On Planet Zog, these are Zodd numbers.



And these are Zeven.



Use squared paper to work out some more Zodd numbers, and some more Zeven ones.

3. How many Zodd numbers are there below 100? And how many Zeven ones?