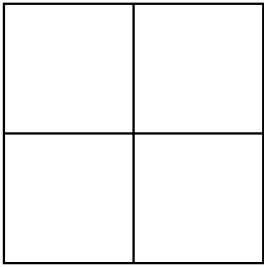
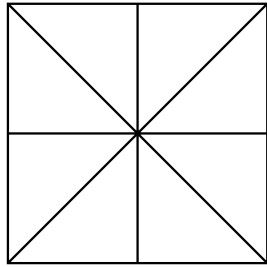


# Fraction patterns


Finish the growing patterns. Any way will do, as long as the fractions are correct.



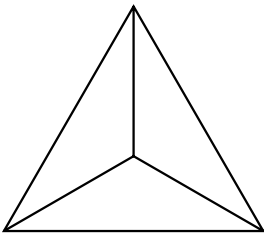
$$\frac{4}{4}$$



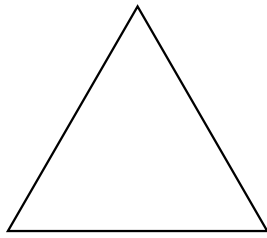
$$\frac{8}{8}$$



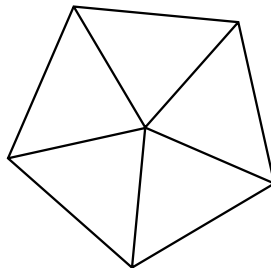
$$\frac{16}{16}$$



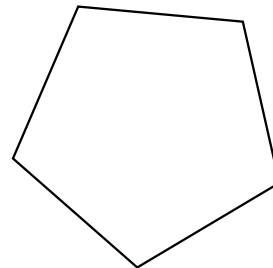
$$\frac{3}{3}$$



$$\frac{6}{6}$$



$$\frac{5}{5}$$



$$\frac{10}{10}$$

Make up your own fraction patterns here.

